

Logo – MINIĆI B

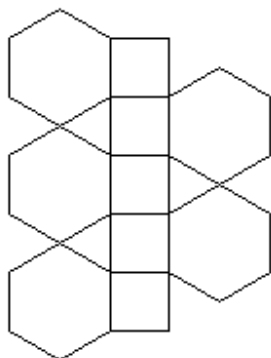
5. Zadatak

TOTEM

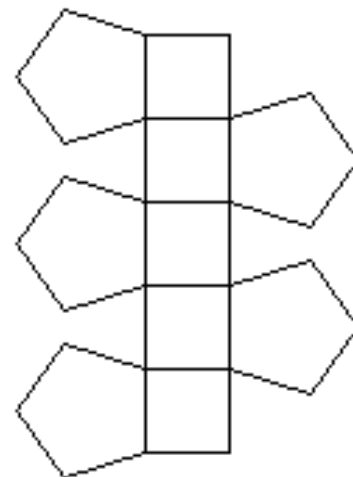
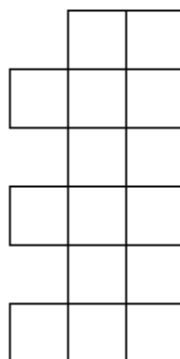
Napiši program **TOTEM :n :m :d** koji će nacrtati stup. Stup se sastoji od :n kvadrata duljine stranice :d. Uz svaki neparni kvadrat, gledavši odozdo, crta se mnogokut s :m stranica duljine :d u lijevo, a uz svaki parni crta se mnogokut s :m stranica duljine :d u desno.

Program spremite pod nazivom **totem.lgo**.

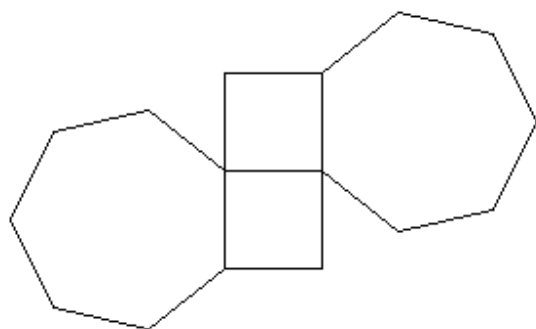
cs totem 5 6 30



cs totem 6 4 30



cs totem 2 7 50



cs totem 3 3 30

