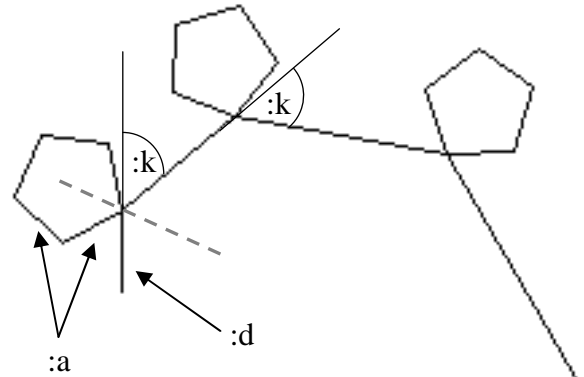


Logo – MINIĆI B

4. Zadatak

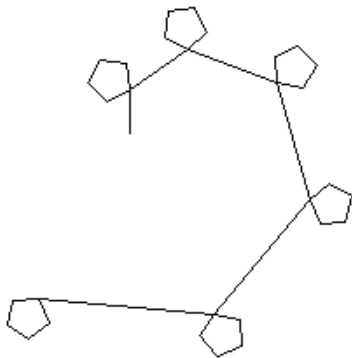
SPIRALA

Napiši program **SPIRALA** :n :d :m :a :k koji će nacrtati spiralu kojoj je početna stranica duljine :d, a svaka sljedeća za :a dulja. Stranice spirale su pod kutem :k, a na vrhu svake stranice spirale nalazi se m-terokut duljine stranice :a. Prouči sliku desno. Položaj slike na ekranu nije bitan.

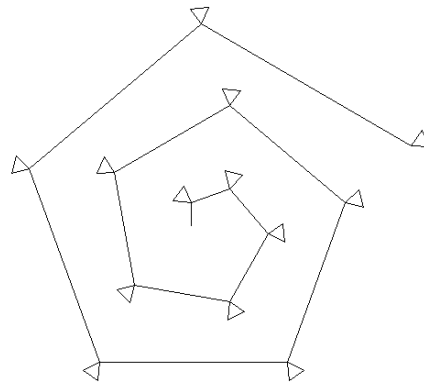


Program spremite pod nazivom **spiralal.go**.


cs spirala 6 25 5 15 55



cs spirala 13 25 3 20 70



cs spirala 250 2 50 1 70



cs spirala 350 5 3 1 89.9

