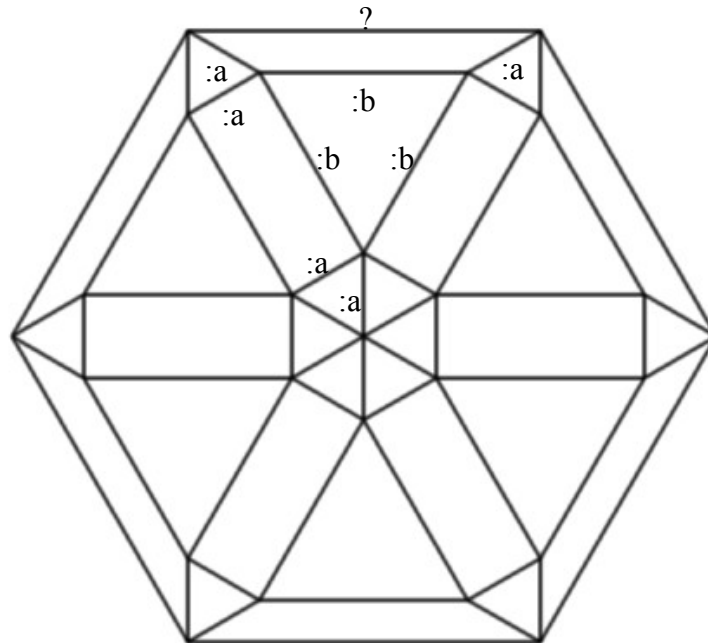


Napiši program koji će crtati volan koji se sastoji od 12 jednakostraničnih trokuta **stranice :a**, 6 pravokutnika **stranica :a i :b**, te 6 trapeza sa **krakovima :a i :b** i **kraćom osnovicom :a**.

Prouči sliku:

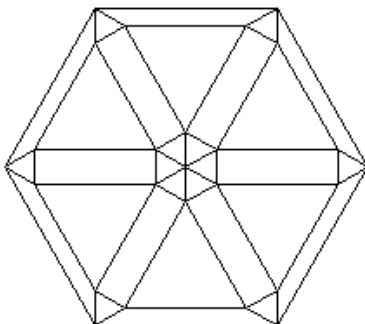


Naziv procedure: **volan :a :b**

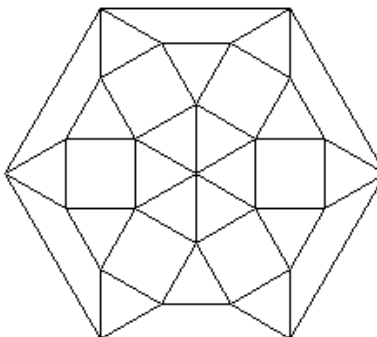
Naziv datoteke: **volan.lgo**

Primjeri:

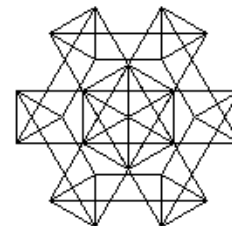
cs volan 20 70



cs volan 40 40



cs volan 30 -90



Napomena: Treći test primjer ima negativni :b, dakle **minus 90!**